

OneInMath

Div 0-5 to 0-5 - div 2 (Pages 10 to 23)

Tutor: _____

Student: _____

Date: ____/____/2024

What To Do Next

When student completes this packet:

- Check packet for accuracy.
- Ask oral questions and determine next assignment.

Assign packet (check one): ____ Classwork ____ Homework

- Finish this packet.
- Repeat this packet: [Div 0-5 to 0-5 - div 2](#)
- Assign next packet: [Div 0-5 to 0-5 - div 3](#)
- Assign another packet: _____

Instructions For This Packet

No instructions. Use common sense :)


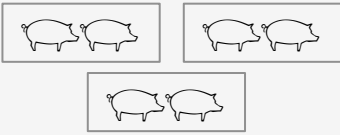
Video Links


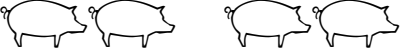




No video recommendations.

Tutor Notes

Divide by 2

You have 6 pigs. Put them into groups of 2 pigs each. How many groups do you have?

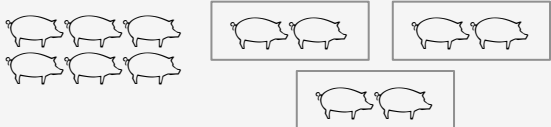
6 pigs	3 groups
	
6	÷ 2 = 3

	Total number of pigs		How many in each group		Number of groups
	↓		↓		↓
	2	÷	2	=	1
	4	÷	2	=	2
	6	÷	2	=	3
	8	÷	2	=	4
	10	÷	2	=	5
	12	÷	2	=	6

Divide by 2


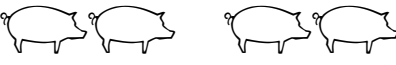




You have 6 pigs. Put them into groups of 2 pigs each. How many groups do you have?

6 pigs 3 groups




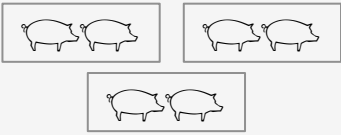
6 ÷ 2 = 3

How many groups?


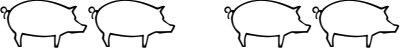




	Total number of pigs		How many in each group		Number of groups
	↓		↓		↓
	2	÷	2	=	—
	4	÷	2	=	—
	6	÷	2	=	—
	8	÷	2	=	—
	10	÷	2	=	—
	12	÷	2	=	—

Divide by 2

You have 6 pigs. Put them into groups of 2 pigs each. How many groups do you have?


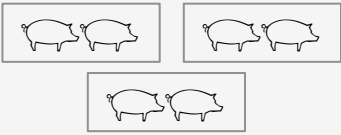
6 pigs	3 groups
	
6	÷ 2 = 3

How many pigs in each group?







	Total number of pigs	÷	How many in each group	=	Number of groups
	↓		↓		↓
	2	÷	—	=	1
	4	÷	—	=	2
	6	÷	—	=	3
	8	÷	—	=	4
	10	÷	—	=	5
	12	÷	—	=	6

Divide by 2

You have 6 pigs. Put them into groups of 2 pigs each. How many groups do you have?

6 pigs	3 groups
	
6	÷ 2 = 3

How many number of pigs?

		Total number of pigs ↓		How many in each group ↓		Number of groups ↓
	—	÷	2	=	1	
	—	÷	2	=	2	
	—	÷	2	=	3	
	—	÷	2	=	4	
	—	÷	2	=	5	
	—	÷	2	=	6	

Name: _____

Date: ____ / ____ / 2024 Start: _____ End: _____

$2 \div 2 = \underline{\quad}$

$8 \div 2 = \underline{\quad}$

$4 \div 2 = \underline{\quad}$

$10 \div 2 = \underline{\quad}$

$6 \div 2 = \underline{\quad}$

$2 \div 2 = \underline{\quad}$

$8 \div 2 = \underline{\quad}$

$4 \div 2 = \underline{\quad}$

$10 \div 2 = \underline{\quad}$

$6 \div 2 = \underline{\quad}$

$2 \div 2 = \underline{\quad}$

$8 \div 2 = \underline{\quad}$

$4 \div 2 = \underline{\quad}$

$10 \div 2 = \underline{\quad}$

$6 \div 2 = \underline{\quad}$

$2 \div 2 = \underline{\quad}$

$8 \div 2 = \underline{\quad}$

$4 \div 2 = \underline{\quad}$

$10 \div 2 = \underline{\quad}$

$6 \div 2 = \underline{\quad}$

$2 \div 2 = \underline{\quad}$

$8 \div 2 = \underline{\quad}$

$4 \div 2 = \underline{\quad}$

$10 \div 2 = \underline{\quad}$

$6 \div 2 = \underline{\quad}$

$2 \div 2 = \underline{\quad}$

Name: _____

Date: ____ / ____ / 2024 Start: _____ End: _____

$2 \div 2 = \underline{\quad}$

$10 \div 2 = \underline{\quad}$

$6 \div 2 = \underline{\quad}$

$8 \div 2 = \underline{\quad}$

$4 \div 2 = \underline{\quad}$

$4 \div 2 = \underline{\quad}$

$8 \div 2 = \underline{\quad}$

$2 \div 2 = \underline{\quad}$

$10 \div 2 = \underline{\quad}$

$6 \div 2 = \underline{\quad}$

$2 \div 2 = \underline{\quad}$

$8 \div 2 = \underline{\quad}$

$4 \div 2 = \underline{\quad}$

$10 \div 2 = \underline{\quad}$

$8 \div 2 = \underline{\quad}$

$2 \div 2 = \underline{\quad}$

$6 \div 2 = \underline{\quad}$

$4 \div 2 = \underline{\quad}$

$10 \div 2 = \underline{\quad}$

$6 \div 2 = \underline{\quad}$

$2 \div 2 = \underline{\quad}$

$10 \div 2 = \underline{\quad}$

$4 \div 2 = \underline{\quad}$

$8 \div 2 = \underline{\quad}$

$6 \div 2 = \underline{\quad}$

$2 \div 2 = \underline{\quad}$

Name: _____

Date: ____ / ____ / 2024 Start: _____ End: _____

$2 \div 2 = \underline{\quad}$

$10 \div 2 = \underline{\quad}$

$8 \div 2 = \underline{\quad}$

$8 \div 2 = \underline{\quad}$

$4 \div 2 = \underline{\quad}$

$10 \div 2 = \underline{\quad}$

$10 \div 2 = \underline{\quad}$

$2 \div 2 = \underline{\quad}$

$6 \div 2 = \underline{\quad}$

$4 \div 2 = \underline{\quad}$

$4 \div 2 = \underline{\quad}$

$8 \div 2 = \underline{\quad}$

$10 \div 2 = \underline{\quad}$

$6 \div 2 = \underline{\quad}$

$2 \div 2 = \underline{\quad}$

$10 \div 2 = \underline{\quad}$

$6 \div 2 = \underline{\quad}$

$4 \div 2 = \underline{\quad}$

$8 \div 2 = \underline{\quad}$

$2 \div 2 = \underline{\quad}$

$2 \div 2 = \underline{\quad}$

$6 \div 2 = \underline{\quad}$

$6 \div 2 = \underline{\quad}$

$8 \div 2 = \underline{\quad}$

$4 \div 2 = \underline{\quad}$

$4 \div 2 = \underline{\quad}$

Name: _____

Date: ____ / ____ / 2024 Start: _____ End: _____

$2 \div 2 = \underline{\quad}$

$4 \div 2 = \underline{\quad}$

$8 \div 2 = \underline{\quad}$

$6 \div 2 = \underline{\quad}$

$6 \div 2 = \underline{\quad}$

$8 \div 2 = \underline{\quad}$

$10 \div 2 = \underline{\quad}$

$10 \div 2 = \underline{\quad}$

$2 \div 2 = \underline{\quad}$

$2 \div 2 = \underline{\quad}$

$8 \div 2 = \underline{\quad}$

$4 \div 2 = \underline{\quad}$

$10 \div 2 = \underline{\quad}$

$2 \div 2 = \underline{\quad}$

$4 \div 2 = \underline{\quad}$

$6 \div 2 = \underline{\quad}$

$6 \div 2 = \underline{\quad}$

$4 \div 2 = \underline{\quad}$

$10 \div 2 = \underline{\quad}$

$10 \div 2 = \underline{\quad}$

$6 \div 2 = \underline{\quad}$

$8 \div 2 = \underline{\quad}$

$8 \div 2 = \underline{\quad}$

$2 \div 2 = \underline{\quad}$

$2 \div 2 = \underline{\quad}$

$10 \div 2 = \underline{\quad}$

Name: _____

Date: ____ / ____ / 2024 Start: _____ End: _____

$1 \times 2 = \underline{\quad}$

$10 \div 2 = \underline{\quad}$

$2 \times 2 = \underline{\quad}$

$6 \div 2 = \underline{\quad}$

$6 \div 2 = \underline{\quad}$

$4 \div 2 = \underline{\quad}$

$1 \times 2 = \underline{\quad}$

$8 \div 2 = \underline{\quad}$

$8 \div 2 = \underline{\quad}$

$0 \times 2 = \underline{\quad}$

$2 \div 2 = \underline{\quad}$

$1 \times 2 = \underline{\quad}$

$10 \div 2 = \underline{\quad}$

$2 \times 2 = \underline{\quad}$

$2 \times 2 = \underline{\quad}$

$1 \times 2 = \underline{\quad}$

$4 \div 2 = \underline{\quad}$

$1 \times 2 = \underline{\quad}$

$0 \times 2 = \underline{\quad}$

$0 \times 2 = \underline{\quad}$

$2 \times 2 = \underline{\quad}$

$2 \times 2 = \underline{\quad}$

$1 \times 2 = \underline{\quad}$

$8 \div 2 = \underline{\quad}$

$2 \div 2 = \underline{\quad}$

$4 \div 2 = \underline{\quad}$

Name: _____

Date: ____ / ____ / 2024 Start: _____ End: _____

$10 \div 2 = \underline{\hspace{2cm}}$

$2 \times 2 = \underline{\hspace{2cm}}$

$2 \times 2 = \underline{\hspace{2cm}}$

$6 \div 2 = \underline{\hspace{2cm}}$

$6 \div 2 = \underline{\hspace{2cm}}$

$4 \div 2 = \underline{\hspace{2cm}}$

$2 \div 2 = \underline{\hspace{2cm}}$

$8 \div 2 = \underline{\hspace{2cm}}$

$10 \div 2 = \underline{\hspace{2cm}}$

$2 \div 2 = \underline{\hspace{2cm}}$

$1 \times 2 = \underline{\hspace{2cm}}$

$1 \times 2 = \underline{\hspace{2cm}}$

$4 \div 2 = \underline{\hspace{2cm}}$

$2 \times 2 = \underline{\hspace{2cm}}$

$2 \div 2 = \underline{\hspace{2cm}}$

$2 \times 2 = \underline{\hspace{2cm}}$

$2 \times 2 = \underline{\hspace{2cm}}$

$10 \div 2 = \underline{\hspace{2cm}}$

$1 \times 2 = \underline{\hspace{2cm}}$

$1 \times 2 = \underline{\hspace{2cm}}$

$8 \div 2 = \underline{\hspace{2cm}}$

$0 \times 2 = \underline{\hspace{2cm}}$

$6 \div 2 = \underline{\hspace{2cm}}$

$1 \times 2 = \underline{\hspace{2cm}}$

$0 \times 2 = \underline{\hspace{2cm}}$

$8 \div 2 = \underline{\hspace{2cm}}$

Name: _____

Date: ____ / ____ / 2024 Start: _____ End: _____

$10 \div 2 = \underline{\hspace{2cm}}$

$10 \div 2 = \underline{\hspace{2cm}}$

$6 \div 2 = \underline{\hspace{2cm}}$

$3 \div 1 = \underline{\hspace{2cm}}$

$4 \div 1 = \underline{\hspace{2cm}}$

$4 \div 1 = \underline{\hspace{2cm}}$

$2 \div 2 = \underline{\hspace{2cm}}$

$2 \div 1 = \underline{\hspace{2cm}}$

$1 \div 1 = \underline{\hspace{2cm}}$

$5 \div 1 = \underline{\hspace{2cm}}$

$8 \div 2 = \underline{\hspace{2cm}}$

$6 \div 2 = \underline{\hspace{2cm}}$

$3 \div 1 = \underline{\hspace{2cm}}$

$8 \div 2 = \underline{\hspace{2cm}}$

$2 \div 1 = \underline{\hspace{2cm}}$

$8 \div 2 = \underline{\hspace{2cm}}$

$5 \div 1 = \underline{\hspace{2cm}}$

$5 \div 1 = \underline{\hspace{2cm}}$

$4 \div 2 = \underline{\hspace{2cm}}$

$3 \div 1 = \underline{\hspace{2cm}}$

$2 \div 2 = \underline{\hspace{2cm}}$

$2 \div 2 = \underline{\hspace{2cm}}$

$1 \div 1 = \underline{\hspace{2cm}}$

$4 \div 1 = \underline{\hspace{2cm}}$

$4 \div 2 = \underline{\hspace{2cm}}$

$1 \div 1 = \underline{\hspace{2cm}}$

Name: _____

Date: ____ / ____ / 2024 Start: _____ End: _____

$4 \div 2 = \underline{\quad}$

$6 \div 2 = \underline{\quad}$

$6 \div 2 = \underline{\quad}$

$8 \div 2 = \underline{\quad}$

$10 \div 2 = \underline{\quad}$

$5 \div 1 = \underline{\quad}$

$2 \div 1 = \underline{\quad}$

$1 \div 1 = \underline{\quad}$

$1 \div 1 = \underline{\quad}$

$6 \div 2 = \underline{\quad}$

$5 \div 1 = \underline{\quad}$

$2 \div 2 = \underline{\quad}$

$2 \div 1 = \underline{\quad}$

$4 \div 1 = \underline{\quad}$

$2 \div 2 = \underline{\quad}$

$4 \div 2 = \underline{\quad}$

$3 \div 1 = \underline{\quad}$

$3 \div 1 = \underline{\quad}$

$4 \div 2 = \underline{\quad}$

$10 \div 2 = \underline{\quad}$

$8 \div 2 = \underline{\quad}$

$2 \div 1 = \underline{\quad}$

$10 \div 2 = \underline{\quad}$

$4 \div 1 = \underline{\quad}$

$4 \div 1 = \underline{\quad}$

$6 \div 2 = \underline{\quad}$

Name: _____

Date: ____ / ____ / 2024 Start: _____ End: _____

$2 \times 1 = \underline{\hspace{2cm}}$

$2 \div 1 = \underline{\hspace{2cm}}$

$3 \times 1 = \underline{\hspace{2cm}}$

$5 \div 1 = \underline{\hspace{2cm}}$

$1 \div 1 = \underline{\hspace{2cm}}$

$5 \times 1 = \underline{\hspace{2cm}}$

$6 \div 2 = \underline{\hspace{2cm}}$

$3 \div 1 = \underline{\hspace{2cm}}$

$2 \times 4 = \underline{\hspace{2cm}}$

$4 \times 1 = \underline{\hspace{2cm}}$

$2 \times 2 = \underline{\hspace{2cm}}$

$3 \times 2 = \underline{\hspace{2cm}}$

$5 \times 2 = \underline{\hspace{2cm}}$

$1 \times 1 = \underline{\hspace{2cm}}$

$5 \div 5 = \underline{\hspace{2cm}}$

$8 \div 2 = \underline{\hspace{2cm}}$

$1 \times 2 = \underline{\hspace{2cm}}$

$1 \times 3 = \underline{\hspace{2cm}}$

$2 \times 5 = \underline{\hspace{2cm}}$

$4 \div 2 = \underline{\hspace{2cm}}$

$10 \div 5 = \underline{\hspace{2cm}}$

$3 \times 2 = \underline{\hspace{2cm}}$

$2 \times 3 = \underline{\hspace{2cm}}$

$4 \div 2 = \underline{\hspace{2cm}}$

$4 \times 2 = \underline{\hspace{2cm}}$

$2 \times 1 = \underline{\hspace{2cm}}$

Name: _____

Date: ____ / ____ / 2024 Start: _____ End: _____

$2 \times 1 = \underline{\hspace{2cm}}$

$2 \times 3 = \underline{\hspace{2cm}}$

$6 \div 3 = \underline{\hspace{2cm}}$

$1 \times 4 = \underline{\hspace{2cm}}$

$2 \div 2 = \underline{\hspace{2cm}}$

$1 \times 2 = \underline{\hspace{2cm}}$

$6 \div 2 = \underline{\hspace{2cm}}$

$2 \div 1 = \underline{\hspace{2cm}}$

$1 \times 1 = \underline{\hspace{2cm}}$

$6 \div 3 = \underline{\hspace{2cm}}$

$2 \div 2 = \underline{\hspace{2cm}}$

$4 \div 4 = \underline{\hspace{2cm}}$

$2 \div 1 = \underline{\hspace{2cm}}$

$2 \div 2 = \underline{\hspace{2cm}}$

$1 \times 2 = \underline{\hspace{2cm}}$

$1 \times 2 = \underline{\hspace{2cm}}$

$10 \div 2 = \underline{\hspace{2cm}}$

$4 \div 1 = \underline{\hspace{2cm}}$

$2 \div 1 = \underline{\hspace{2cm}}$

$2 \div 2 = \underline{\hspace{2cm}}$

$2 \times 2 = \underline{\hspace{2cm}}$

$3 \div 3 = \underline{\hspace{2cm}}$

$1 \times 5 = \underline{\hspace{2cm}}$

$8 \div 4 = \underline{\hspace{2cm}}$

$1 \div 1 = \underline{\hspace{2cm}}$

$2 \times 1 = \underline{\hspace{2cm}}$