

OneInMath

Div 0-5 to 0-5 - div 3 (Pages 24 to 37)

Tutor: _____

Student: _____

Date: ____/____/2022

What To Do Next

When student completes this packet:

- Check packet for accuracy.
- Ask oral questions and determine next assignment.

Assign packet (check one): ____ Classwork ____ Homework

- Finish this packet.
- Repeat this packet: [Div 0-5 to 0-5 - div 3](#)
- Assign next packet: [Div 0-5 to 0-5 - div 4](#)
- Assign another packet: _____

Instructions For This Packet

No instructions. Use common sense :)



Video Links




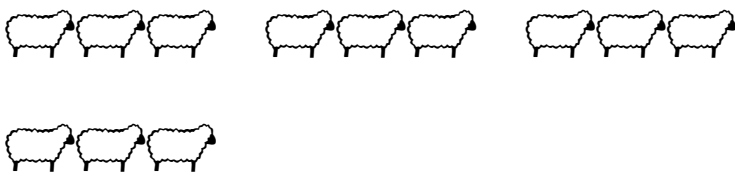
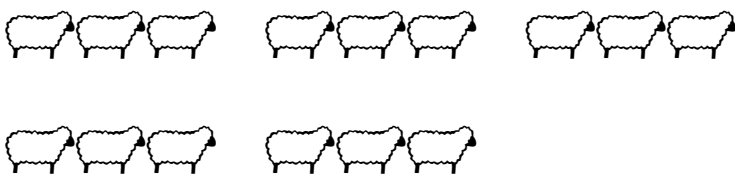

No video recommendations.

Tutor Notes

Divide by 3



You have 6 sheep. Put them into groups of 3 sheep each. How many groups do you have?

6 sheep	2 groups
	
$6 \div 3 = 2$	




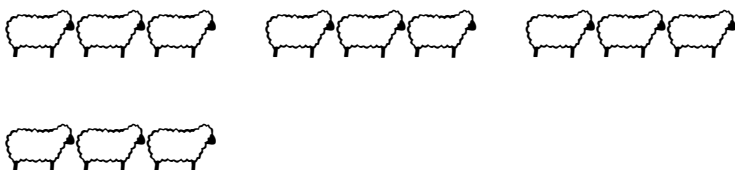

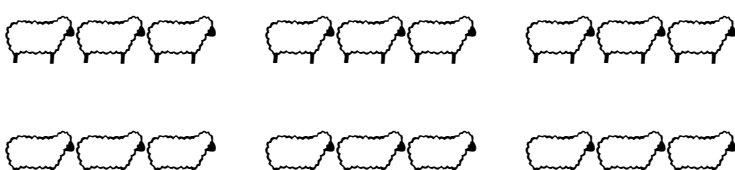
	Total number of sheep		How many in each group		Number of groups
	↓		↓		↓
	3	÷	3	=	1
	6	÷	3	=	2
	9	÷	3	=	3
	12	÷	3	=	4
	15	÷	3	=	5
	18	÷	3	=	6

Divide by 3

You have 6 sheep. Put them into groups of 3 sheep each. How many groups do you have?



6 sheep	2 groups
	
6 ÷ 3 =	2

How many groups?




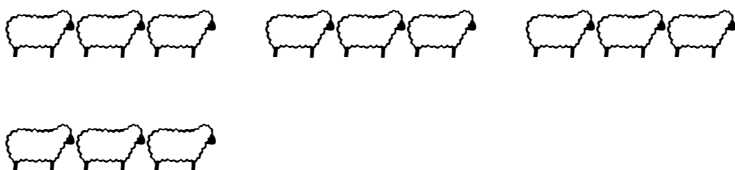

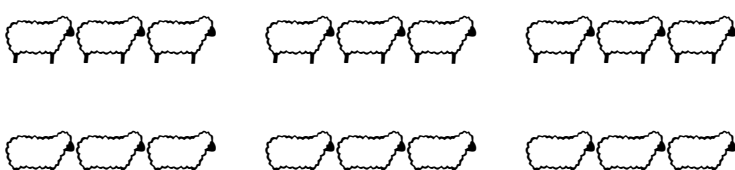
	Total number of sheep		How many in each group		Number of groups
	↓		↓		↓
	3	÷	3	=	—
	6	÷	3	=	—
	9	÷	3	=	—
	12	÷	3	=	—
	15	÷	3	=	—
	18	÷	3	=	—

Divide by 3

You have 6 sheep. Put them into groups of 3 sheep each. How many groups do you have?



6 sheep	2 groups
	
$6 \div 3 = 2$	

How many sheep in each group?

	Total number of sheep		How many in each group		Number of groups
	↓		↓		↓
	3	÷	—	=	1
	6	÷	—	=	2
	9	÷	—	=	3
	12	÷	—	=	4
	15	÷	—	=	5
	18	÷	—	=	6

Divide by 3

You have 6 sheep. Put them into groups of 3 sheep each. How many groups do you have?






















6 sheep	2 groups
	
$6 \div 3 = 2$	

How many number of sheep?

Total number of sheep

How many in each group

Number of groups

	—	÷	3	=	1
 	—	÷	3	=	2
  	—	÷	3	=	3
   	—	÷	3	=	4
    	—	÷	3	=	5
     	—	÷	3	=	6

Name: _____

Date: ____ / ____ / 2022 Start: _____ End: _____

$3 \div 3 = \underline{\quad}$

$12 \div 3 = \underline{\quad}$

$6 \div 3 = \underline{\quad}$

$15 \div 3 = \underline{\quad}$

$9 \div 3 = \underline{\quad}$

$3 \div 3 = \underline{\quad}$

$12 \div 3 = \underline{\quad}$

$6 \div 3 = \underline{\quad}$

$15 \div 3 = \underline{\quad}$

$9 \div 3 = \underline{\quad}$

$3 \div 3 = \underline{\quad}$

$12 \div 3 = \underline{\quad}$

$6 \div 3 = \underline{\quad}$

$15 \div 3 = \underline{\quad}$

$9 \div 3 = \underline{\quad}$

$3 \div 3 = \underline{\quad}$

$12 \div 3 = \underline{\quad}$

$6 \div 3 = \underline{\quad}$

$15 \div 3 = \underline{\quad}$

$9 \div 3 = \underline{\quad}$

$3 \div 3 = \underline{\quad}$

$12 \div 3 = \underline{\quad}$

$6 \div 3 = \underline{\quad}$

$15 \div 3 = \underline{\quad}$

$9 \div 3 = \underline{\quad}$

$3 \div 3 = \underline{\quad}$

Name: _____

Date: ____ / ____ / 2022 Start: _____ End: _____

$6 \div 3 = \underline{\quad}$

$15 \div 3 = \underline{\quad}$

$3 \div 3 = \underline{\quad}$

$12 \div 3 = \underline{\quad}$

$9 \div 3 = \underline{\quad}$

$3 \div 3 = \underline{\quad}$

$12 \div 3 = \underline{\quad}$

$9 \div 3 = \underline{\quad}$

$15 \div 3 = \underline{\quad}$

$6 \div 3 = \underline{\quad}$

$3 \div 3 = \underline{\quad}$

$12 \div 3 = \underline{\quad}$

$6 \div 3 = \underline{\quad}$

$15 \div 3 = \underline{\quad}$

$12 \div 3 = \underline{\quad}$

$6 \div 3 = \underline{\quad}$

$9 \div 3 = \underline{\quad}$

$3 \div 3 = \underline{\quad}$

$15 \div 3 = \underline{\quad}$

$9 \div 3 = \underline{\quad}$

$3 \div 3 = \underline{\quad}$

$12 \div 3 = \underline{\quad}$

$6 \div 3 = \underline{\quad}$

$15 \div 3 = \underline{\quad}$

$9 \div 3 = \underline{\quad}$

$3 \div 3 = \underline{\quad}$

Name: _____

Date: ____ / ____ / 2022 Start: _____ End: _____

$12 \div 3 = \underline{\quad}$

$6 \div 3 = \underline{\quad}$

$9 \div 3 = \underline{\quad}$

$15 \div 3 = \underline{\quad}$

$3 \div 3 = \underline{\quad}$

$3 \div 3 = \underline{\quad}$

$15 \div 3 = \underline{\quad}$

$9 \div 3 = \underline{\quad}$

$6 \div 3 = \underline{\quad}$

$15 \div 3 = \underline{\quad}$

$3 \div 3 = \underline{\quad}$

$12 \div 3 = \underline{\quad}$

$6 \div 3 = \underline{\quad}$

$6 \div 3 = \underline{\quad}$

$9 \div 3 = \underline{\quad}$

$6 \div 3 = \underline{\quad}$

$15 \div 3 = \underline{\quad}$

$3 \div 3 = \underline{\quad}$

$12 \div 3 = \underline{\quad}$

$15 \div 3 = \underline{\quad}$

$9 \div 3 = \underline{\quad}$

$12 \div 3 = \underline{\quad}$

$3 \div 3 = \underline{\quad}$

$9 \div 3 = \underline{\quad}$

$12 \div 3 = \underline{\quad}$

$6 \div 3 = \underline{\quad}$

Name: _____

Date: ____ / ____ / 2022 Start: _____ End: _____

$15 \div 3 = \underline{\quad}$

$3 \div 3 = \underline{\quad}$

$3 \div 3 = \underline{\quad}$

$9 \div 3 = \underline{\quad}$

$12 \div 3 = \underline{\quad}$

$6 \div 3 = \underline{\quad}$

$9 \div 3 = \underline{\quad}$

$15 \div 3 = \underline{\quad}$

$12 \div 3 = \underline{\quad}$

$3 \div 3 = \underline{\quad}$

$9 \div 3 = \underline{\quad}$

$12 \div 3 = \underline{\quad}$

$6 \div 3 = \underline{\quad}$

$9 \div 3 = \underline{\quad}$

$15 \div 3 = \underline{\quad}$

$3 \div 3 = \underline{\quad}$

$3 \div 3 = \underline{\quad}$

$6 \div 3 = \underline{\quad}$

$15 \div 3 = \underline{\quad}$

$15 \div 3 = \underline{\quad}$

$9 \div 3 = \underline{\quad}$

$12 \div 3 = \underline{\quad}$

$6 \div 3 = \underline{\quad}$

$3 \div 3 = \underline{\quad}$

$12 \div 3 = \underline{\quad}$

$9 \div 3 = \underline{\quad}$

Name: _____

Date: ____ / ____ / 2022 Start: _____ End: _____

$0 \times 3 = \underline{\hspace{2cm}}$

$1 \times 3 = \underline{\hspace{2cm}}$

$1 \times 3 = \underline{\hspace{2cm}}$

$12 \div 3 = \underline{\hspace{2cm}}$

$15 \div 3 = \underline{\hspace{2cm}}$

$1 \times 3 = \underline{\hspace{2cm}}$

$9 \div 3 = \underline{\hspace{2cm}}$

$0 \times 3 = \underline{\hspace{2cm}}$

$0 \times 3 = \underline{\hspace{2cm}}$

$3 \div 3 = \underline{\hspace{2cm}}$

$3 \div 3 = \underline{\hspace{2cm}}$

$15 \div 3 = \underline{\hspace{2cm}}$

$1 \times 3 = \underline{\hspace{2cm}}$

$9 \div 3 = \underline{\hspace{2cm}}$

$6 \div 3 = \underline{\hspace{2cm}}$

$6 \div 3 = \underline{\hspace{2cm}}$

$12 \div 3 = \underline{\hspace{2cm}}$

$12 \div 3 = \underline{\hspace{2cm}}$

$1 \times 3 = \underline{\hspace{2cm}}$

$9 \div 3 = \underline{\hspace{2cm}}$

$1 \times 3 = \underline{\hspace{2cm}}$

$3 \div 3 = \underline{\hspace{2cm}}$

$0 \times 3 = \underline{\hspace{2cm}}$

$15 \div 3 = \underline{\hspace{2cm}}$

$6 \div 3 = \underline{\hspace{2cm}}$

$1 \times 3 = \underline{\hspace{2cm}}$

Name: _____

Date: ____ / ____ / 2022 Start: _____ End: _____

$1 \times 3 = \underline{\quad}$

$3 \div 3 = \underline{\quad}$

$0 \times 3 = \underline{\quad}$

$3 \div 3 = \underline{\quad}$

$0 \times 3 = \underline{\quad}$

$15 \div 3 = \underline{\quad}$

$1 \times 3 = \underline{\quad}$

$6 \div 3 = \underline{\quad}$

$0 \times 3 = \underline{\quad}$

$1 \times 3 = \underline{\quad}$

$15 \div 3 = \underline{\quad}$

$1 \times 3 = \underline{\quad}$

$12 \div 3 = \underline{\quad}$

$0 \times 3 = \underline{\quad}$

$1 \times 3 = \underline{\quad}$

$9 \div 3 = \underline{\quad}$

$9 \div 3 = \underline{\quad}$

$0 \times 3 = \underline{\quad}$

$6 \div 3 = \underline{\quad}$

$1 \times 3 = \underline{\quad}$

$1 \times 3 = \underline{\quad}$

$12 \div 3 = \underline{\quad}$

$1 \times 3 = \underline{\quad}$

$12 \div 3 = \underline{\quad}$

$0 \times 3 = \underline{\quad}$

$3 \div 3 = \underline{\quad}$

Name: _____

Date: ____ / ____ / 2022 Start: _____ End: _____

$8 \div 2 = \underline{\quad}$

$2 \div 1 = \underline{\quad}$

$1 \div 1 = \underline{\quad}$

$3 \div 1 = \underline{\quad}$

$6 \div 3 = \underline{\quad}$

$9 \div 3 = \underline{\quad}$

$2 \div 2 = \underline{\quad}$

$3 \div 1 = \underline{\quad}$

$4 \div 1 = \underline{\quad}$

$8 \div 2 = \underline{\quad}$

$12 \div 3 = \underline{\quad}$

$2 \div 1 = \underline{\quad}$

$3 \div 3 = \underline{\quad}$

$15 \div 3 = \underline{\quad}$

$9 \div 3 = \underline{\quad}$

$5 \div 1 = \underline{\quad}$

$10 \div 2 = \underline{\quad}$

$12 \div 3 = \underline{\quad}$

$4 \div 2 = \underline{\quad}$

$6 \div 3 = \underline{\quad}$

$5 \div 1 = \underline{\quad}$

$1 \div 1 = \underline{\quad}$

$6 \div 2 = \underline{\quad}$

$6 \div 2 = \underline{\quad}$

$15 \div 3 = \underline{\quad}$

$4 \div 1 = \underline{\quad}$

Name: _____

Date: ____ / ____ / 2022 Start: _____ End: _____

$2 \div 2 = \underline{\quad}$

$12 \div 3 = \underline{\quad}$

$3 \div 3 = \underline{\quad}$

$9 \div 3 = \underline{\quad}$

$4 \div 2 = \underline{\quad}$

$6 \div 3 = \underline{\quad}$

$10 \div 2 = \underline{\quad}$

$3 \div 3 = \underline{\quad}$

$10 \div 2 = \underline{\quad}$

$2 \div 1 = \underline{\quad}$

$4 \div 1 = \underline{\quad}$

$1 \div 1 = \underline{\quad}$

$2 \div 2 = \underline{\quad}$

$6 \div 3 = \underline{\quad}$

$6 \div 2 = \underline{\quad}$

$15 \div 3 = \underline{\quad}$

$5 \div 1 = \underline{\quad}$

$2 \div 2 = \underline{\quad}$

$3 \div 1 = \underline{\quad}$

$1 \div 1 = \underline{\quad}$

$8 \div 2 = \underline{\quad}$

$3 \div 3 = \underline{\quad}$

$15 \div 3 = \underline{\quad}$

$2 \div 1 = \underline{\quad}$

$4 \div 2 = \underline{\quad}$

$4 \div 2 = \underline{\quad}$

Name: _____

Date: ____ / ____ / 2022 Start: _____ End: _____

$6 \div 3 = \underline{\quad}$

$10 \div 5 = \underline{\quad}$

$3 \times 2 = \underline{\quad}$

$3 \div 3 = \underline{\quad}$

$12 \div 4 = \underline{\quad}$

$2 \div 2 = \underline{\quad}$

$3 \times 1 = \underline{\quad}$

$12 \div 3 = \underline{\quad}$

$1 \times 2 = \underline{\quad}$

$3 \div 1 = \underline{\quad}$

$10 \div 2 = \underline{\quad}$

$5 \times 3 = \underline{\quad}$

$9 \div 3 = \underline{\quad}$

$1 \times 3 = \underline{\quad}$

$4 \div 4 = \underline{\quad}$

$3 \div 1 = \underline{\quad}$

$1 \times 2 = \underline{\quad}$

$3 \times 1 = \underline{\quad}$

$5 \div 5 = \underline{\quad}$

$4 \div 2 = \underline{\quad}$

$2 \times 1 = \underline{\quad}$

$6 \div 2 = \underline{\quad}$

$3 \times 5 = \underline{\quad}$

$2 \times 3 = \underline{\quad}$

$5 \div 1 = \underline{\quad}$

$2 \div 2 = \underline{\quad}$

Name: _____

Date: ____ / ____ / 2022 Start: _____ End: _____

$6 \div 2 = \underline{\hspace{2cm}}$

$2 \times 3 = \underline{\hspace{2cm}}$

$8 \div 2 = \underline{\hspace{2cm}}$

$3 \times 2 = \underline{\hspace{2cm}}$

$5 \times 1 = \underline{\hspace{2cm}}$

$3 \div 3 = \underline{\hspace{2cm}}$

$2 \times 5 = \underline{\hspace{2cm}}$

$1 \times 1 = \underline{\hspace{2cm}}$

$5 \times 2 = \underline{\hspace{2cm}}$

$2 \times 1 = \underline{\hspace{2cm}}$

$2 \times 4 = \underline{\hspace{2cm}}$

$4 \div 1 = \underline{\hspace{2cm}}$

$8 \div 4 = \underline{\hspace{2cm}}$

$2 \div 1 = \underline{\hspace{2cm}}$

$1 \times 3 = \underline{\hspace{2cm}}$

$4 \times 3 = \underline{\hspace{2cm}}$

$3 \times 4 = \underline{\hspace{2cm}}$

$1 \times 4 = \underline{\hspace{2cm}}$

$4 \times 2 = \underline{\hspace{2cm}}$

$4 \times 1 = \underline{\hspace{2cm}}$

$1 \times 5 = \underline{\hspace{2cm}}$

$3 \times 3 = \underline{\hspace{2cm}}$

$1 \div 1 = \underline{\hspace{2cm}}$

$2 \div 1 = \underline{\hspace{2cm}}$

$2 \times 2 = \underline{\hspace{2cm}}$

$6 \div 3 = \underline{\hspace{2cm}}$

Page 28	Page 30	Page 32	Page 34	Page 36
1 4	4 2	1 3	4 2	2 2
2 5	3 5	4 4	1 3	6 1
3 1	1 1	5 5	2 3	3 1
4 2	5 3	3 1	1 3	3 4
5 3	2 5	2 1	4 4	2 3
1 4	1 4	1 5	4 2	5 15
2 5	2 2	3 3	1 5	3 3
3 1	3 2	2 2	3 5	1 3
4 2	5 1	4 4	5 4	2 3
5 3	4 5	5 3	2 2	1 2
1 4	3 4	4 1	5 1	2 3
2 5	1 3	2 5	3 3	15 6
3 1	4 2	2 5	5 4	5 1

Page 29	Page 31	Page 33	Page 35	Page 37
2 5	5 1	4 1	1 4	3 6
1 4	1 3	2 1	1 3	4 6
3 1	4 2	1 5	2 2	5 1
4 3	3 5	3 2	5 1	10 1
5 2	4 1	1 5	5 2	10 2
1 4	3 4	5 3	4 1	8 4
2 5	2 3	4 2	1 2	2 2
4 2	5 1	4 3	3 5	3 12
3 1	1 2	3 1	5 1	12 4
5 3	5 5	2 4	3 1	8 4
1 4	3 4	5 4	4 1	5 9
2 5	2 1	3 4	5 2	1 2
3 1	4 3	2 1	2 2	4 2