

OneInMath

Div 0-5 to 0-5 - div 3 (Pages 24 to 37)

Tutor: _____

Student: _____

Date: ____/____/2024

What To Do Next

When student completes this packet:

- Check packet for accuracy.
- Ask oral questions and determine next assignment.

Assign packet (check one): ____ Classwork ____ Homework

- Finish this packet.
- Repeat this packet: [Div 0-5 to 0-5 - div 3](#)
- Assign next packet: [Div 0-5 to 0-5 - div 4](#)
- Assign another packet: _____

Instructions For This Packet

No instructions. Use common sense :)



Video Links




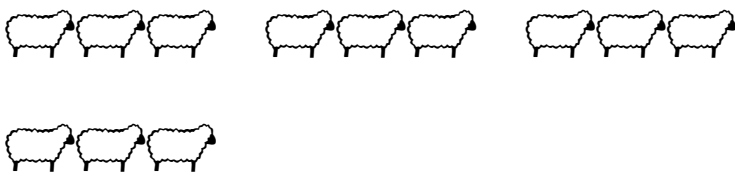
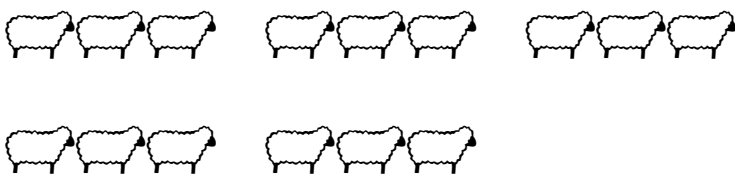

No video recommendations.

Tutor Notes

Divide by 3



You have 6 sheep. Put them into groups of 3 sheep each. How many groups do you have?

6 sheep	2 groups
	
$6 \div 3 = 2$	




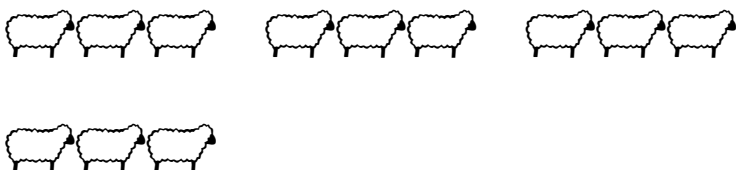

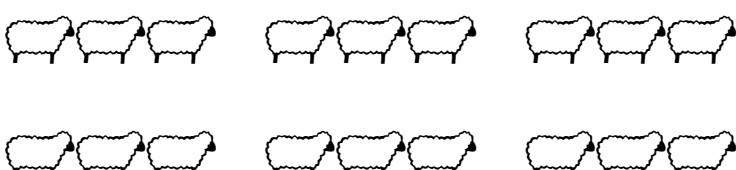
	Total number of sheep		How many in each group		Number of groups
	↓		↓		↓
	3	÷	3	=	1
	6	÷	3	=	2
	9	÷	3	=	3
	12	÷	3	=	4
	15	÷	3	=	5
	18	÷	3	=	6

Divide by 3

You have 6 sheep. Put them into groups of 3 sheep each. How many groups do you have?



6 sheep	2 groups
	
$6 \div 3 = 2$	

How many groups?




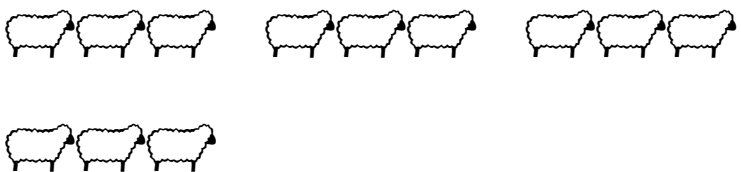
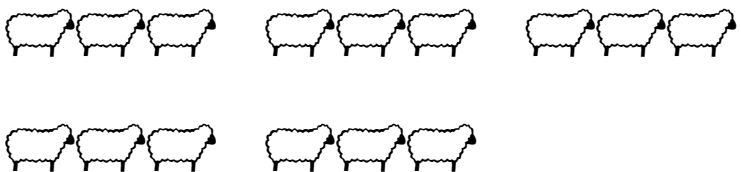

	Total number of sheep		How many in each group		Number of groups
	↓		↓		↓
	3	÷	3	=	—
	6	÷	3	=	—
	9	÷	3	=	—
	12	÷	3	=	—
	15	÷	3	=	—
	18	÷	3	=	—

Divide by 3

You have 6 sheep. Put them into groups of 3 sheep each. How many groups do you have?



6 sheep	2 groups
	
$6 \div 3 = 2$	

How many sheep in each group?






















	Total number of sheep		How many in each group		Number of groups
	↓		↓		↓
	3	÷	—	=	1
	6	÷	—	=	2
	9	÷	—	=	3
	12	÷	—	=	4
	15	÷	—	=	5
	18	÷	—	=	6

Divide by 3

You have 6 sheep. Put them into groups of 3 sheep each. How many groups do you have?

6 sheep	2 groups
	
$6 \div 3 = 2$	

How many number of sheep?

	Total number of sheep		How many in each group		Number of groups
	↓		↓		↓
	—	÷	3	=	1
 	—	÷	3	=	2
  	—	÷	3	=	3
   	—	÷	3	=	4
    	—	÷	3	=	5
     	—	÷	3	=	6

Name: _____

Date: ____ / ____ / 2024 Start: _____ End: _____

$3 \div 3 = \underline{\quad}$

$12 \div 3 = \underline{\quad}$

$6 \div 3 = \underline{\quad}$

$15 \div 3 = \underline{\quad}$

$9 \div 3 = \underline{\quad}$

$3 \div 3 = \underline{\quad}$

$12 \div 3 = \underline{\quad}$

$6 \div 3 = \underline{\quad}$

$15 \div 3 = \underline{\quad}$

$9 \div 3 = \underline{\quad}$

$3 \div 3 = \underline{\quad}$

$12 \div 3 = \underline{\quad}$

$6 \div 3 = \underline{\quad}$

$15 \div 3 = \underline{\quad}$

$9 \div 3 = \underline{\quad}$

$3 \div 3 = \underline{\quad}$

$12 \div 3 = \underline{\quad}$

$6 \div 3 = \underline{\quad}$

$15 \div 3 = \underline{\quad}$

$9 \div 3 = \underline{\quad}$

$3 \div 3 = \underline{\quad}$

$12 \div 3 = \underline{\quad}$

$6 \div 3 = \underline{\quad}$

$15 \div 3 = \underline{\quad}$

$9 \div 3 = \underline{\quad}$

$3 \div 3 = \underline{\quad}$

Name: _____

Date: ____ / ____ / 2024 Start: _____ End: _____

$3 \div 3 = \underline{\quad}$

$12 \div 3 = \underline{\quad}$

$6 \div 3 = \underline{\quad}$

$15 \div 3 = \underline{\quad}$

$9 \div 3 = \underline{\quad}$

$3 \div 3 = \underline{\quad}$

$15 \div 3 = \underline{\quad}$

$6 \div 3 = \underline{\quad}$

$12 \div 3 = \underline{\quad}$

$9 \div 3 = \underline{\quad}$

$6 \div 3 = \underline{\quad}$

$15 \div 3 = \underline{\quad}$

$3 \div 3 = \underline{\quad}$

$12 \div 3 = \underline{\quad}$

$9 \div 3 = \underline{\quad}$

$3 \div 3 = \underline{\quad}$

$12 \div 3 = \underline{\quad}$

$9 \div 3 = \underline{\quad}$

$15 \div 3 = \underline{\quad}$

$6 \div 3 = \underline{\quad}$

$3 \div 3 = \underline{\quad}$

$12 \div 3 = \underline{\quad}$

$9 \div 3 = \underline{\quad}$

$15 \div 3 = \underline{\quad}$

$6 \div 3 = \underline{\quad}$

$3 \div 3 = \underline{\quad}$

Name: _____

Date: ____ / ____ / 2024 Start: _____ End: _____

$6 \div 3 = \underline{\quad}$

$9 \div 3 = \underline{\quad}$

$9 \div 3 = \underline{\quad}$

$12 \div 3 = \underline{\quad}$

$3 \div 3 = \underline{\quad}$

$6 \div 3 = \underline{\quad}$

$12 \div 3 = \underline{\quad}$

$12 \div 3 = \underline{\quad}$

$15 \div 3 = \underline{\quad}$

$15 \div 3 = \underline{\quad}$

$12 \div 3 = \underline{\quad}$

$3 \div 3 = \underline{\quad}$

$9 \div 3 = \underline{\quad}$

$9 \div 3 = \underline{\quad}$

$15 \div 3 = \underline{\quad}$

$3 \div 3 = \underline{\quad}$

$3 \div 3 = \underline{\quad}$

$6 \div 3 = \underline{\quad}$

$6 \div 3 = \underline{\quad}$

$9 \div 3 = \underline{\quad}$

$3 \div 3 = \underline{\quad}$

$15 \div 3 = \underline{\quad}$

$15 \div 3 = \underline{\quad}$

$12 \div 3 = \underline{\quad}$

$6 \div 3 = \underline{\quad}$

$6 \div 3 = \underline{\quad}$

Name: _____

Date: ____ / ____ / 2024 Start: _____ End: _____

$15 \div 3 = \underline{\hspace{2cm}}$

$3 \div 3 = \underline{\hspace{2cm}}$

$9 \div 3 = \underline{\hspace{2cm}}$

$9 \div 3 = \underline{\hspace{2cm}}$

$12 \div 3 = \underline{\hspace{2cm}}$

$12 \div 3 = \underline{\hspace{2cm}}$

$3 \div 3 = \underline{\hspace{2cm}}$

$6 \div 3 = \underline{\hspace{2cm}}$

$15 \div 3 = \underline{\hspace{2cm}}$

$15 \div 3 = \underline{\hspace{2cm}}$

$6 \div 3 = \underline{\hspace{2cm}}$

$3 \div 3 = \underline{\hspace{2cm}}$

$3 \div 3 = \underline{\hspace{2cm}}$

$12 \div 3 = \underline{\hspace{2cm}}$

$12 \div 3 = \underline{\hspace{2cm}}$

$3 \div 3 = \underline{\hspace{2cm}}$

$9 \div 3 = \underline{\hspace{2cm}}$

$9 \div 3 = \underline{\hspace{2cm}}$

$6 \div 3 = \underline{\hspace{2cm}}$

$6 \div 3 = \underline{\hspace{2cm}}$

$9 \div 3 = \underline{\hspace{2cm}}$

$15 \div 3 = \underline{\hspace{2cm}}$

$15 \div 3 = \underline{\hspace{2cm}}$

$6 \div 3 = \underline{\hspace{2cm}}$

$12 \div 3 = \underline{\hspace{2cm}}$

$3 \div 3 = \underline{\hspace{2cm}}$

Name: _____

Date: ____ / ____ / 2024 Start: _____ End: _____

$0 \times 3 = \underline{\hspace{2cm}}$

$15 \div 3 = \underline{\hspace{2cm}}$

$12 \div 3 = \underline{\hspace{2cm}}$

$12 \div 3 = \underline{\hspace{2cm}}$

$0 \times 3 = \underline{\hspace{2cm}}$

$0 \times 3 = \underline{\hspace{2cm}}$

$1 \times 3 = \underline{\hspace{2cm}}$

$1 \times 3 = \underline{\hspace{2cm}}$

$6 \div 3 = \underline{\hspace{2cm}}$

$0 \times 3 = \underline{\hspace{2cm}}$

$1 \times 3 = \underline{\hspace{2cm}}$

$3 \div 3 = \underline{\hspace{2cm}}$

$15 \div 3 = \underline{\hspace{2cm}}$

$9 \div 3 = \underline{\hspace{2cm}}$

$3 \div 3 = \underline{\hspace{2cm}}$

$1 \times 3 = \underline{\hspace{2cm}}$

$1 \times 3 = \underline{\hspace{2cm}}$

$15 \div 3 = \underline{\hspace{2cm}}$

$9 \div 3 = \underline{\hspace{2cm}}$

$3 \div 3 = \underline{\hspace{2cm}}$

$6 \div 3 = \underline{\hspace{2cm}}$

$0 \times 3 = \underline{\hspace{2cm}}$

$1 \times 3 = \underline{\hspace{2cm}}$

$6 \div 3 = \underline{\hspace{2cm}}$

$1 \times 3 = \underline{\hspace{2cm}}$

$1 \times 3 = \underline{\hspace{2cm}}$

Name: _____

Date: ____ / ____ / 2024 Start: _____ End: _____

$12 \div 3 = \underline{\hspace{2cm}}$

$1 \times 3 = \underline{\hspace{2cm}}$

$1 \times 3 = \underline{\hspace{2cm}}$

$9 \div 3 = \underline{\hspace{2cm}}$

$9 \div 3 = \underline{\hspace{2cm}}$

$1 \times 3 = \underline{\hspace{2cm}}$

$0 \times 3 = \underline{\hspace{2cm}}$

$15 \div 3 = \underline{\hspace{2cm}}$

$15 \div 3 = \underline{\hspace{2cm}}$

$0 \times 3 = \underline{\hspace{2cm}}$

$1 \times 3 = \underline{\hspace{2cm}}$

$6 \div 3 = \underline{\hspace{2cm}}$

$1 \times 3 = \underline{\hspace{2cm}}$

$3 \div 3 = \underline{\hspace{2cm}}$

$12 \div 3 = \underline{\hspace{2cm}}$

$0 \times 3 = \underline{\hspace{2cm}}$

$0 \times 3 = \underline{\hspace{2cm}}$

$1 \times 3 = \underline{\hspace{2cm}}$

$0 \times 3 = \underline{\hspace{2cm}}$

$12 \div 3 = \underline{\hspace{2cm}}$

$9 \div 3 = \underline{\hspace{2cm}}$

$1 \times 3 = \underline{\hspace{2cm}}$

$3 \div 3 = \underline{\hspace{2cm}}$

$1 \times 3 = \underline{\hspace{2cm}}$

$6 \div 3 = \underline{\hspace{2cm}}$

$9 \div 3 = \underline{\hspace{2cm}}$

Name: _____

Date: ____ / ____ / 2024 Start: _____ End: _____

$4 \div 1 = \underline{\hspace{2cm}}$

$3 \div 3 = \underline{\hspace{2cm}}$

$5 \div 1 = \underline{\hspace{2cm}}$

$4 \div 2 = \underline{\hspace{2cm}}$

$2 \div 2 = \underline{\hspace{2cm}}$

$2 \div 1 = \underline{\hspace{2cm}}$

$8 \div 2 = \underline{\hspace{2cm}}$

$2 \div 2 = \underline{\hspace{2cm}}$

$6 \div 3 = \underline{\hspace{2cm}}$

$3 \div 3 = \underline{\hspace{2cm}}$

$12 \div 3 = \underline{\hspace{2cm}}$

$8 \div 2 = \underline{\hspace{2cm}}$

$2 \div 1 = \underline{\hspace{2cm}}$

$6 \div 3 = \underline{\hspace{2cm}}$

$1 \div 1 = \underline{\hspace{2cm}}$

$3 \div 1 = \underline{\hspace{2cm}}$

$3 \div 1 = \underline{\hspace{2cm}}$

$4 \div 2 = \underline{\hspace{2cm}}$

$15 \div 3 = \underline{\hspace{2cm}}$

$10 \div 2 = \underline{\hspace{2cm}}$

$9 \div 3 = \underline{\hspace{2cm}}$

$15 \div 3 = \underline{\hspace{2cm}}$

$10 \div 2 = \underline{\hspace{2cm}}$

$5 \div 1 = \underline{\hspace{2cm}}$

$6 \div 2 = \underline{\hspace{2cm}}$

$1 \div 1 = \underline{\hspace{2cm}}$

Name: _____

Date: ____ / ____ / 2024 Start: _____ End: _____

$9 \div 3 = \underline{\quad}$

$12 \div 3 = \underline{\quad}$

$6 \div 2 = \underline{\quad}$

$15 \div 3 = \underline{\quad}$

$4 \div 1 = \underline{\quad}$

$4 \div 2 = \underline{\quad}$

$12 \div 3 = \underline{\quad}$

$2 \div 2 = \underline{\quad}$

$1 \div 1 = \underline{\quad}$

$2 \div 1 = \underline{\quad}$

$6 \div 3 = \underline{\quad}$

$3 \div 1 = \underline{\quad}$

$4 \div 1 = \underline{\quad}$

$8 \div 2 = \underline{\quad}$

$5 \div 1 = \underline{\quad}$

$10 \div 2 = \underline{\quad}$

$3 \div 3 = \underline{\quad}$

$9 \div 3 = \underline{\quad}$

$6 \div 2 = \underline{\quad}$

$12 \div 3 = \underline{\quad}$

$10 \div 2 = \underline{\quad}$

$2 \div 1 = \underline{\quad}$

$8 \div 2 = \underline{\quad}$

$3 \div 1 = \underline{\quad}$

$9 \div 3 = \underline{\quad}$

$6 \div 2 = \underline{\quad}$

Name: _____

Date: ____ / ____ / 2024 Start: _____ End: _____

$5 \times 2 = \underline{\hspace{2cm}}$

$9 \div 3 = \underline{\hspace{2cm}}$

$15 \div 5 = \underline{\hspace{2cm}}$

$2 \times 3 = \underline{\hspace{2cm}}$

$3 \div 1 = \underline{\hspace{2cm}}$

$2 \times 4 = \underline{\hspace{2cm}}$

$8 \div 2 = \underline{\hspace{2cm}}$

$4 \times 3 = \underline{\hspace{2cm}}$

$2 \times 3 = \underline{\hspace{2cm}}$

$10 \div 2 = \underline{\hspace{2cm}}$

$6 \div 2 = \underline{\hspace{2cm}}$

$2 \times 2 = \underline{\hspace{2cm}}$

$2 \times 1 = \underline{\hspace{2cm}}$

$3 \div 3 = \underline{\hspace{2cm}}$

$4 \div 1 = \underline{\hspace{2cm}}$

$3 \times 5 = \underline{\hspace{2cm}}$

$3 \div 3 = \underline{\hspace{2cm}}$

$12 \div 3 = \underline{\hspace{2cm}}$

$6 \div 3 = \underline{\hspace{2cm}}$

$6 \div 2 = \underline{\hspace{2cm}}$

$2 \div 1 = \underline{\hspace{2cm}}$

$4 \div 4 = \underline{\hspace{2cm}}$

$2 \div 1 = \underline{\hspace{2cm}}$

$1 \times 3 = \underline{\hspace{2cm}}$

$2 \div 2 = \underline{\hspace{2cm}}$

$3 \times 3 = \underline{\hspace{2cm}}$

Name: _____

Date: ____ / ____ / 2024 Start: _____ End: _____

$3 \times 2 = \underline{\quad}$

$5 \div 1 = \underline{\quad}$

$2 \times 1 = \underline{\quad}$

$2 \times 5 = \underline{\quad}$

$5 \div 5 = \underline{\quad}$

$4 \times 2 = \underline{\quad}$

$2 \div 2 = \underline{\quad}$

$3 \div 1 = \underline{\quad}$

$4 \times 1 = \underline{\quad}$

$3 \times 4 = \underline{\quad}$

$3 \times 2 = \underline{\quad}$

$3 \times 1 = \underline{\quad}$

$1 \times 2 = \underline{\quad}$

$6 \div 3 = \underline{\quad}$

$4 \div 2 = \underline{\quad}$

$1 \times 3 = \underline{\quad}$

$1 \times 4 = \underline{\quad}$

$5 \times 3 = \underline{\quad}$

$3 \times 1 = \underline{\quad}$

$15 \div 3 = \underline{\quad}$

$8 \div 4 = \underline{\quad}$

$10 \div 5 = \underline{\quad}$

$12 \div 4 = \underline{\quad}$

$5 \times 1 = \underline{\quad}$

$1 \times 2 = \underline{\quad}$

$1 \times 5 = \underline{\quad}$