

OneInMath

Div 0-5 to 0-5 - div 1 (Pages 1 to 9)

Tutor: _____

Student: _____

Date: ____/____/2022

What To Do Next

When student completes this packet:

- Check packet for accuracy.
- Ask oral questions and determine next assignment.

Assign packet (check one): ____ Classwork ____ Homework

- Finish this packet.
- Repeat this packet: [Div 0-5 to 0-5 - div 1](#)
- Assign next packet: [Div 0-5 to 0-5 - div 2](#)
- Assign another packet: _____

Instructions For This Packet

No instructions. Use common sense :)



Video Links







No video recommendations.

Tutor Notes

Divide by 1



You have 3 apples. Put them into groups of 1 apple each. How many groups do you have?

3 apples	3 groups
	
$3 \div 1 = 3$	







	Total number of apples		How many in each group		Number of groups
	↓		↓		↓
	1	÷	1	=	1
	2	÷	1	=	2
	3	÷	1	=	3
	4	÷	1	=	4
	5	÷	1	=	5
	6	÷	1	=	6

Divide by 1

You have 3 apples. Put them into groups of 1 apple each. How many groups do you have?

3 apples	3 groups
	
$3 \div 1 = 3$	


How many groups?

	Total number of apples		How many in each group		Number of groups
	↓		↓		↓
	1	÷	1	=	—
	2	÷	1	=	—
	3	÷	1	=	—
	4	÷	1	=	—
	5	÷	1	=	—
	6	÷	1	=	—

Divide by 1







You have 3 apples. Put them into groups of 1 apple each. How many groups do you have?

3 apples 3 groups





3 ÷ 1 = 3

How many apples in each group?







	Total number of apples ↓		How many in each group ↓		Number of groups ↓
	1	÷	—	=	1
	2	÷	—	=	2
	3	÷	—	=	3
	4	÷	—	=	4
	5	÷	—	=	5
	6	÷	—	=	6

Divide by 1

You have 3 apples. Put them into groups of 1 apple each. How many groups do you have?

3 apples	3 groups
	
$3 \div 1 = 3$	

How many number of apples?

	Total number of apples		How many in each group		Number of groups
	↓		↓		↓
	—	÷	1	=	1
	—	÷	1	=	2
	—	÷	1	=	3
	—	÷	1	=	4
	—	÷	1	=	5
	—	÷	1	=	6

Name: _____

Date: ____ / ____ / 2022 Start: _____ End: _____

$1 \div 1 = \underline{\quad}$

$4 \div 1 = \underline{\quad}$

$2 \div 1 = \underline{\quad}$

$5 \div 1 = \underline{\quad}$

$3 \div 1 = \underline{\quad}$

$1 \div 1 = \underline{\quad}$

$4 \div 1 = \underline{\quad}$

$2 \div 1 = \underline{\quad}$

$5 \div 1 = \underline{\quad}$

$3 \div 1 = \underline{\quad}$

$1 \div 1 = \underline{\quad}$

$4 \div 1 = \underline{\quad}$

$2 \div 1 = \underline{\quad}$

$5 \div 1 = \underline{\quad}$

$3 \div 1 = \underline{\quad}$

$1 \div 1 = \underline{\quad}$

$4 \div 1 = \underline{\quad}$

$2 \div 1 = \underline{\quad}$

$5 \div 1 = \underline{\quad}$

$3 \div 1 = \underline{\quad}$

$1 \div 1 = \underline{\quad}$

$4 \div 1 = \underline{\quad}$

$2 \div 1 = \underline{\quad}$

$5 \div 1 = \underline{\quad}$

$3 \div 1 = \underline{\quad}$

$1 \div 1 = \underline{\quad}$

Name: _____

Date: ____ / ____ / 2022 Start: _____ End: _____

$1 \div 1 = \underline{\quad}$

$4 \div 1 = \underline{\quad}$

$2 \div 1 = \underline{\quad}$

$5 \div 1 = \underline{\quad}$

$3 \div 1 = \underline{\quad}$

$1 \div 1 = \underline{\quad}$

$5 \div 1 = \underline{\quad}$

$2 \div 1 = \underline{\quad}$

$4 \div 1 = \underline{\quad}$

$3 \div 1 = \underline{\quad}$

$1 \div 1 = \underline{\quad}$

$5 \div 1 = \underline{\quad}$

$2 \div 1 = \underline{\quad}$

$4 \div 1 = \underline{\quad}$

$3 \div 1 = \underline{\quad}$

$1 \div 1 = \underline{\quad}$

$5 \div 1 = \underline{\quad}$

$2 \div 1 = \underline{\quad}$

$4 \div 1 = \underline{\quad}$

$4 \div 1 = \underline{\quad}$

$1 \div 1 = \underline{\quad}$

$3 \div 1 = \underline{\quad}$

$3 \div 1 = \underline{\quad}$

$5 \div 1 = \underline{\quad}$

$2 \div 1 = \underline{\quad}$

$1 \div 1 = \underline{\quad}$

Name: _____

Date: ____ / ____ / 2022 Start: _____ End: _____

$1 \div 1 = \underline{\quad}$

$3 \div 1 = \underline{\quad}$

$5 \div 1 = \underline{\quad}$

$5 \div 1 = \underline{\quad}$

$4 \div 1 = \underline{\quad}$

$5 \div 1 = \underline{\quad}$

$3 \div 1 = \underline{\quad}$

$3 \div 1 = \underline{\quad}$

$2 \div 1 = \underline{\quad}$

$4 \div 1 = \underline{\quad}$

$3 \div 1 = \underline{\quad}$

$1 \div 1 = \underline{\quad}$

$2 \div 1 = \underline{\quad}$

$2 \div 1 = \underline{\quad}$

$1 \div 1 = \underline{\quad}$

$4 \div 1 = \underline{\quad}$

$5 \div 1 = \underline{\quad}$

$3 \div 1 = \underline{\quad}$

$4 \div 1 = \underline{\quad}$

$5 \div 1 = \underline{\quad}$

$1 \div 1 = \underline{\quad}$

$2 \div 1 = \underline{\quad}$

$4 \div 1 = \underline{\quad}$

$1 \div 1 = \underline{\quad}$

$2 \div 1 = \underline{\quad}$

$5 \div 1 = \underline{\quad}$

Name: _____

Date: ____ / ____ / 2022 Start: _____ End: _____

$5 \div 1 = \underline{\quad}$

$3 \div 1 = \underline{\quad}$

$4 \div 1 = \underline{\quad}$

$2 \div 1 = \underline{\quad}$

$3 \times 1 = \underline{\quad}$

$1 \times 1 = \underline{\quad}$

$2 \times 1 = \underline{\quad}$

$2 \times 1 = \underline{\quad}$

$3 \div 1 = \underline{\quad}$

$5 \times 1 = \underline{\quad}$

$4 \times 1 = \underline{\quad}$

$3 \times 1 = \underline{\quad}$

$2 \div 1 = \underline{\quad}$

$5 \div 1 = \underline{\quad}$

$1 \div 1 = \underline{\quad}$

$3 \div 1 = \underline{\quad}$

$5 \times 1 = \underline{\quad}$

$3 \times 1 = \underline{\quad}$

$1 \times 1 = \underline{\quad}$

$2 \div 1 = \underline{\quad}$

$4 \div 1 = \underline{\quad}$

$5 \times 1 = \underline{\quad}$

$1 \div 1 = \underline{\quad}$

$4 \div 1 = \underline{\quad}$

$4 \times 1 = \underline{\quad}$

$2 \times 1 = \underline{\quad}$

Name: _____

Date: ____ / ____ / 2022 Start: _____ End: _____

$1 \times 1 = \underline{\quad}$

$3 \times 1 = \underline{\quad}$

$4 \times 1 = \underline{\quad}$

$3 \times 1 = \underline{\quad}$

$5 \div 1 = \underline{\quad}$

$1 \times 1 = \underline{\quad}$

$1 \div 1 = \underline{\quad}$

$3 \div 1 = \underline{\quad}$

$2 \div 1 = \underline{\quad}$

$5 \times 1 = \underline{\quad}$

$4 \times 1 = \underline{\quad}$

$5 \div 1 = \underline{\quad}$

$1 \div 1 = \underline{\quad}$

$2 \div 1 = \underline{\quad}$

$5 \div 1 = \underline{\quad}$

$2 \times 1 = \underline{\quad}$

$5 \times 1 = \underline{\quad}$

$4 \times 1 = \underline{\quad}$

$4 \div 1 = \underline{\quad}$

$1 \div 1 = \underline{\quad}$

$2 \times 1 = \underline{\quad}$

$4 \div 1 = \underline{\quad}$

$3 \div 1 = \underline{\quad}$

$3 \div 1 = \underline{\quad}$

$1 \times 1 = \underline{\quad}$

$4 \times 1 = \underline{\quad}$