

OneInMath

Div 0-5 to 0-5 - div 5 (Pages 52 to 65)

Tutor: _____

Student: _____

Date: ____/____/2024

What To Do Next

When student completes this packet:

- Check packet for accuracy.
- Ask oral questions and determine next assignment.

Assign packet (check one): ____ Classwork ____ Homework

- Finish this packet.
- Repeat this packet: [Div 0-5 to 0-5 - div 5](#)
- Assign next packet: [Div 0-5 to 0-5 - div same and zero](#)
- Assign another packet: _____

Instructions For This Packet

No instructions. Use common sense :)




Video Links






















No video recommendations.

Tutor Notes

Divide by 5




You have 10 cats. Put them into groups of 5 cats each. How many groups do you have?

10 cats	2 groups
	<div style="border: 1px solid black; padding: 2px; display: inline-block;">  </div> <div style="border: 1px solid black; padding: 2px; display: inline-block;">  </div>
$10 \div 5 = 2$	

	Total number of cats		How many in each group		Number of groups
	↓		↓		↓
	5	÷	5	=	1
 	10	÷	5	=	2
  	15	÷	5	=	3
   	20	÷	5	=	4
    	25	÷	5	=	5
     	30	÷	5	=	6







Divide by 5

You have 10 cats. Put them into groups of 5 cats each. How many groups do you have?

<p>10 cats</p>  <p>10</p>	<p>2 groups</p> <div style="border: 1px solid black; padding: 2px; width: fit-content; margin: 2px auto;">  </div> <div style="border: 1px solid black; padding: 2px; width: fit-content; margin: 2px auto;">  </div> <p>5 = 2</p>
--	--




Total number of cats		How many in each group		Number of groups
↓		↓		↓

How many groups?

	5	÷	5	=	—
	10	÷	5	=	—
	15	÷	5	=	—
	20	÷	5	=	—
	25	÷	5	=	—
	30	÷	5	=	—







Divide by 5

You have 10 cats. Put them into groups of 5 cats each. How many groups do you have?

<p>10 cats</p>  <p>10</p>	<p>2 groups</p> <div style="border: 1px solid black; padding: 2px; width: fit-content; margin: 2px auto;">  </div> <div style="border: 1px solid black; padding: 2px; width: fit-content; margin: 2px auto;">  </div> <p>5 = 2</p>
--	--




How many cats in each group?

Total number of cats	How many in each group	Number of groups
↓	↓	↓

	<p>5</p>	<p>÷</p>	<p>—</p>	<p>=</p>	<p>1</p>
	<p>10</p>	<p>÷</p>	<p>—</p>	<p>=</p>	<p>2</p>
	<p>15</p>	<p>÷</p>	<p>—</p>	<p>=</p>	<p>3</p>
	<p>20</p>	<p>÷</p>	<p>—</p>	<p>=</p>	<p>4</p>
	<p>25</p>	<p>÷</p>	<p>—</p>	<p>=</p>	<p>5</p>
	<p>30</p>	<p>÷</p>	<p>—</p>	<p>=</p>	<p>6</p>























Divide by 5

You have 10 cats. Put them into groups of 5 cats each. How many groups do you have?

10 cats	2 groups
	<div style="border: 1px solid black; padding: 2px; display: inline-block;">  </div> <div style="border: 1px solid black; padding: 2px; display: inline-block;">  </div>
$10 \div 5 = 2$	

How many number of cats?

Total number of cats		How many in each group		Number of groups
↓		↓		↓

		$\underline{\quad} \div 5 = 1$
		$\underline{\quad} \div 5 = 2$
 		$\underline{\quad} \div 5 = 3$
 	 	$\underline{\quad} \div 5 = 4$
  	 	$\underline{\quad} \div 5 = 5$
  	  	$\underline{\quad} \div 5 = 6$

Name: _____

Date: ____ / ____ / 2024 Start: _____ End: _____

$5 \div 5 = \underline{\quad}$

$20 \div 5 = \underline{\quad}$

$10 \div 5 = \underline{\quad}$

$25 \div 5 = \underline{\quad}$

$15 \div 5 = \underline{\quad}$

$5 \div 5 = \underline{\quad}$

$20 \div 5 = \underline{\quad}$

$10 \div 5 = \underline{\quad}$

$25 \div 5 = \underline{\quad}$

$15 \div 5 = \underline{\quad}$

$5 \div 5 = \underline{\quad}$

$20 \div 5 = \underline{\quad}$

$10 \div 5 = \underline{\quad}$

$25 \div 5 = \underline{\quad}$

$15 \div 5 = \underline{\quad}$

$5 \div 5 = \underline{\quad}$

$20 \div 5 = \underline{\quad}$

$10 \div 5 = \underline{\quad}$

$25 \div 5 = \underline{\quad}$

$15 \div 5 = \underline{\quad}$

$5 \div 5 = \underline{\quad}$

$20 \div 5 = \underline{\quad}$

$10 \div 5 = \underline{\quad}$

$25 \div 5 = \underline{\quad}$

$15 \div 5 = \underline{\quad}$

$5 \div 5 = \underline{\quad}$

Name: _____

Date: ____ / ____ / 2024 Start: _____ End: _____

$5 \div 5 = \underline{\quad}$

$25 \div 5 = \underline{\quad}$

$10 \div 5 = \underline{\quad}$

$20 \div 5 = \underline{\quad}$

$15 \div 5 = \underline{\quad}$

$5 \div 5 = \underline{\quad}$

$25 \div 5 = \underline{\quad}$

$10 \div 5 = \underline{\quad}$

$20 \div 5 = \underline{\quad}$

$20 \div 5 = \underline{\quad}$

$5 \div 5 = \underline{\quad}$

$15 \div 5 = \underline{\quad}$

$10 \div 5 = \underline{\quad}$

$25 \div 5 = \underline{\quad}$

$15 \div 5 = \underline{\quad}$

$5 \div 5 = \underline{\quad}$

$25 \div 5 = \underline{\quad}$

$10 \div 5 = \underline{\quad}$

$20 \div 5 = \underline{\quad}$

$15 \div 5 = \underline{\quad}$

$5 \div 5 = \underline{\quad}$

$25 \div 5 = \underline{\quad}$

$10 \div 5 = \underline{\quad}$

$20 \div 5 = \underline{\quad}$

$15 \div 5 = \underline{\quad}$

$5 \div 5 = \underline{\quad}$

Name: _____

Date: ____ / ____ / 2024 Start: _____ End: _____

$10 \div 5 = \underline{\quad}$

$15 \div 5 = \underline{\quad}$

$25 \div 5 = \underline{\quad}$

$5 \div 5 = \underline{\quad}$

$15 \div 5 = \underline{\quad}$

$20 \div 5 = \underline{\quad}$

$20 \div 5 = \underline{\quad}$

$5 \div 5 = \underline{\quad}$

$5 \div 5 = \underline{\quad}$

$15 \div 5 = \underline{\quad}$

$10 \div 5 = \underline{\quad}$

$25 \div 5 = \underline{\quad}$

$15 \div 5 = \underline{\quad}$

$10 \div 5 = \underline{\quad}$

$5 \div 5 = \underline{\quad}$

$5 \div 5 = \underline{\quad}$

$20 \div 5 = \underline{\quad}$

$25 \div 5 = \underline{\quad}$

$25 \div 5 = \underline{\quad}$

$15 \div 5 = \underline{\quad}$

$25 \div 5 = \underline{\quad}$

$10 \div 5 = \underline{\quad}$

$20 \div 5 = \underline{\quad}$

$20 \div 5 = \underline{\quad}$

$10 \div 5 = \underline{\quad}$

$25 \div 5 = \underline{\quad}$

Name: _____

Date: ____ / ____ / 2024 Start: _____ End: _____

$10 \div 5 = \underline{\quad}$

$15 \div 5 = \underline{\quad}$

$15 \div 5 = \underline{\quad}$

$5 \div 5 = \underline{\quad}$

$20 \div 5 = \underline{\quad}$

$10 \div 5 = \underline{\quad}$

$5 \div 5 = \underline{\quad}$

$15 \div 5 = \underline{\quad}$

$25 \div 5 = \underline{\quad}$

$25 \div 5 = \underline{\quad}$

$20 \div 5 = \underline{\quad}$

$20 \div 5 = \underline{\quad}$

$5 \div 5 = \underline{\quad}$

$5 \div 5 = \underline{\quad}$

$15 \div 5 = \underline{\quad}$

$10 \div 5 = \underline{\quad}$

$10 \div 5 = \underline{\quad}$

$25 \div 5 = \underline{\quad}$

$5 \div 5 = \underline{\quad}$

$20 \div 5 = \underline{\quad}$

$20 \div 5 = \underline{\quad}$

$15 \div 5 = \underline{\quad}$

$10 \div 5 = \underline{\quad}$

$5 \div 5 = \underline{\quad}$

$25 \div 5 = \underline{\quad}$

$20 \div 5 = \underline{\quad}$

Name: _____

Date: ____ / ____ / 2024 Start: _____ End: _____

$0 \times 5 = \underline{\hspace{2cm}}$

$10 \div 5 = \underline{\hspace{2cm}}$

$25 \div 5 = \underline{\hspace{2cm}}$

$20 \div 5 = \underline{\hspace{2cm}}$

$0 \times 5 = \underline{\hspace{2cm}}$

$0 \times 5 = \underline{\hspace{2cm}}$

$5 \div 5 = \underline{\hspace{2cm}}$

$5 \div 5 = \underline{\hspace{2cm}}$

$20 \div 5 = \underline{\hspace{2cm}}$

$15 \div 5 = \underline{\hspace{2cm}}$

$0 \times 5 = \underline{\hspace{2cm}}$

$25 \div 5 = \underline{\hspace{2cm}}$

$1 \times 5 = \underline{\hspace{2cm}}$

$0 \times 5 = \underline{\hspace{2cm}}$

$15 \div 5 = \underline{\hspace{2cm}}$

$25 \div 5 = \underline{\hspace{2cm}}$

$10 \div 5 = \underline{\hspace{2cm}}$

$0 \times 5 = \underline{\hspace{2cm}}$

$0 \times 5 = \underline{\hspace{2cm}}$

$10 \div 5 = \underline{\hspace{2cm}}$

$0 \times 5 = \underline{\hspace{2cm}}$

$20 \div 5 = \underline{\hspace{2cm}}$

$0 \times 5 = \underline{\hspace{2cm}}$

$0 \times 5 = \underline{\hspace{2cm}}$

$1 \times 5 = \underline{\hspace{2cm}}$

$0 \times 5 = \underline{\hspace{2cm}}$

Name: _____

Date: ____ / ____ / 2024 Start: _____ End: _____

$15 \div 5 = \underline{\quad}$

$5 \div 5 = \underline{\quad}$

$5 \div 5 = \underline{\quad}$

$0 \times 5 = \underline{\quad}$

$1 \times 5 = \underline{\quad}$

$25 \div 5 = \underline{\quad}$

$0 \times 5 = \underline{\quad}$

$15 \div 5 = \underline{\quad}$

$10 \div 5 = \underline{\quad}$

$1 \times 5 = \underline{\quad}$

$0 \times 5 = \underline{\quad}$

$20 \div 5 = \underline{\quad}$

$1 \times 5 = \underline{\quad}$

$0 \times 5 = \underline{\quad}$

$0 \times 5 = \underline{\quad}$

$5 \div 5 = \underline{\quad}$

$15 \div 5 = \underline{\quad}$

$10 \div 5 = \underline{\quad}$

$25 \div 5 = \underline{\quad}$

$0 \times 5 = \underline{\quad}$

$0 \times 5 = \underline{\quad}$

$0 \times 5 = \underline{\quad}$

$0 \times 5 = \underline{\quad}$

$25 \div 5 = \underline{\quad}$

$20 \div 5 = \underline{\quad}$

$20 \div 5 = \underline{\quad}$

Name: _____

Date: ____ / ____ / 2024 Start: _____ End: _____

$1 \div 1 = \underline{\hspace{2cm}}$

$5 \div 1 = \underline{\hspace{2cm}}$

$10 \div 5 = \underline{\hspace{2cm}}$

$15 \div 5 = \underline{\hspace{2cm}}$

$4 \div 4 = \underline{\hspace{2cm}}$

$2 \div 2 = \underline{\hspace{2cm}}$

$3 \div 1 = \underline{\hspace{2cm}}$

$25 \div 5 = \underline{\hspace{2cm}}$

$6 \div 3 = \underline{\hspace{2cm}}$

$20 \div 4 = \underline{\hspace{2cm}}$

$12 \div 4 = \underline{\hspace{2cm}}$

$16 \div 4 = \underline{\hspace{2cm}}$

$10 \div 2 = \underline{\hspace{2cm}}$

$4 \div 2 = \underline{\hspace{2cm}}$

$4 \div 1 = \underline{\hspace{2cm}}$

$12 \div 3 = \underline{\hspace{2cm}}$

$15 \div 3 = \underline{\hspace{2cm}}$

$6 \div 2 = \underline{\hspace{2cm}}$

$9 \div 3 = \underline{\hspace{2cm}}$

$20 \div 5 = \underline{\hspace{2cm}}$

$5 \div 5 = \underline{\hspace{2cm}}$

$8 \div 4 = \underline{\hspace{2cm}}$

$2 \div 1 = \underline{\hspace{2cm}}$

$8 \div 2 = \underline{\hspace{2cm}}$

$3 \div 3 = \underline{\hspace{2cm}}$

$6 \div 2 = \underline{\hspace{2cm}}$

Name: _____

Date: ____ / ____ / 2024 Start: _____ End: _____

$4 \div 4 = \underline{\quad}$

$10 \div 2 = \underline{\quad}$

$2 \div 2 = \underline{\quad}$

$15 \div 3 = \underline{\quad}$

$8 \div 4 = \underline{\quad}$

$9 \div 3 = \underline{\quad}$

$20 \div 4 = \underline{\quad}$

$6 \div 3 = \underline{\quad}$

$16 \div 4 = \underline{\quad}$

$4 \div 1 = \underline{\quad}$

$12 \div 3 = \underline{\quad}$

$15 \div 5 = \underline{\quad}$

$8 \div 2 = \underline{\quad}$

$3 \div 3 = \underline{\quad}$

$10 \div 5 = \underline{\quad}$

$4 \div 2 = \underline{\quad}$

$5 \div 5 = \underline{\quad}$

$3 \div 1 = \underline{\quad}$

$5 \div 1 = \underline{\quad}$

$2 \div 1 = \underline{\quad}$

$1 \div 1 = \underline{\quad}$

$25 \div 5 = \underline{\quad}$

$20 \div 5 = \underline{\quad}$

$2 \div 2 = \underline{\quad}$

$12 \div 4 = \underline{\quad}$

$20 \div 4 = \underline{\quad}$

Name: _____

Date: ____ / ____ / 2024 Start: _____ End: _____

$3 \times 2 = \underline{\quad}$

$4 \times 1 = \underline{\quad}$

$1 \times 3 = \underline{\quad}$

$2 \times 5 = \underline{\quad}$

$5 \div 5 = \underline{\quad}$

$20 \div 5 = \underline{\quad}$

$4 \div 1 = \underline{\quad}$

$5 \times 5 = \underline{\quad}$

$6 \div 2 = \underline{\quad}$

$1 \times 2 = \underline{\quad}$

$1 \times 4 = \underline{\quad}$

$4 \div 4 = \underline{\quad}$

$12 \div 3 = \underline{\quad}$

$4 \times 3 = \underline{\quad}$

$2 \times 2 = \underline{\quad}$

$25 \div 5 = \underline{\quad}$

$3 \div 3 = \underline{\quad}$

$3 \times 1 = \underline{\quad}$

$3 \times 4 = \underline{\quad}$

$5 \times 1 = \underline{\quad}$

$8 \div 2 = \underline{\quad}$

$1 \times 1 = \underline{\quad}$

$4 \times 2 = \underline{\quad}$

$5 \times 3 = \underline{\quad}$

$10 \div 2 = \underline{\quad}$

$8 \div 4 = \underline{\quad}$

Name: _____

Date: ____ / ____ / 2024 Start: _____ End: _____

$5 \times 2 = \underline{\quad}$

$4 \times 5 = \underline{\quad}$

$4 \div 1 = \underline{\quad}$

$3 \div 1 = \underline{\quad}$

$2 \times 1 = \underline{\quad}$

$2 \times 3 = \underline{\quad}$

$20 \div 4 = \underline{\quad}$

$1 \div 1 = \underline{\quad}$

$1 \times 5 = \underline{\quad}$

$3 \times 5 = \underline{\quad}$

$2 \div 1 = \underline{\quad}$

$4 \times 1 = \underline{\quad}$

$6 \div 3 = \underline{\quad}$

$6 \div 2 = \underline{\quad}$

$10 \div 5 = \underline{\quad}$

$5 \times 4 = \underline{\quad}$

$3 \times 2 = \underline{\quad}$

$12 \div 4 = \underline{\quad}$

$4 \div 2 = \underline{\quad}$

$6 \div 3 = \underline{\quad}$

$5 \div 1 = \underline{\quad}$

$2 \times 4 = \underline{\quad}$

$2 \times 3 = \underline{\quad}$

$1 \times 4 = \underline{\quad}$

$2 \div 2 = \underline{\quad}$

$4 \div 4 = \underline{\quad}$

Page 56	Page 58	Page 60	Page 62	Page 64
1 4	2 3	4 2	1 5	6 4
2 5	5 1	5 4	2 3	3 10
3 1	3 4	2 2	1 1	1 4
4 2	4 1	1 1	3 5	4 25
5 3	1 3	4 3	2 5	3 2
1 4	2 5	1 5	3 4	4 1
2 5	3 2	5 4	5 2	4 12
3 1	1 1	3 5	4 4	4 5
4 2	4 5	2 1	5 3	1 3
5 3	5 3	3 2	3 4	12 5
1 4	5 2	3 4	1 2	4 1
2 5	4 4	1 4	2 4	8 15
3 1	2 5	5 3	1 3	5 2

Page 57	Page 59	Page 61	Page 63	Page 65
1 5	2 3	3 1	1 5	10 20
2 4	3 1	1 2	1 5	4 3
3 1	4 2	5 5	2 3	2 6
5 2	1 3	2 3	5 2	5 1
4 4	5 5	2 5	4 4	5 15
1 3	4 4	3 4	4 3	2 4
2 5	1 1	5 3	4 1	2 3
3 1	3 2	4 1	2 2	2 20
5 2	2 5	3 2	1 3	6 3
4 3	1 4	5 1	5 2	2 2
1 5	4 3	2 4	1 5	5 8
2 4	2 1	1 5	4 1	6 4
3 1	5 4	4 4	3 5	1 1