

OneInMath

Div 0-5 to 0-5 - div 5 (Pages 52 to 65)

Tutor: _____

Student: _____

Date: ____/____/2022

What To Do Next

When student completes this packet:

- Check packet for accuracy.
- Ask oral questions and determine next assignment.

Assign packet (check one): ____ Classwork ____ Homework

- Finish this packet.
- Repeat this packet: [Div 0-5 to 0-5 - div 5](#)
- Assign next packet: [Div 0-5 to 0-5 - div same and zero](#)
- Assign another packet: _____

Instructions For This Packet

No instructions. Use common sense :)




Video Links







No video recommendations.

Tutor Notes

Divide by 5




You have 10 cats. Put them into groups of 5 cats each. How many groups do you have?

<p>10 cats</p>  <p style="text-align: center;">10</p>	<p>2 groups</p> <div style="border: 1px solid black; padding: 2px; width: fit-content; margin: 2px auto;">  </div> <div style="border: 1px solid black; padding: 2px; width: fit-content; margin: 2px auto;">  </div> <p style="text-align: center;">5 = 2</p>
--	--






















	Total number of cats		How many in each group		Number of groups
	↓		↓		↓
	5	÷	5	=	1
	10	÷	5	=	2
	15	÷	5	=	3
	20	÷	5	=	4
	25	÷	5	=	5
	30	÷	5	=	6

Divide by 5

You have 10 cats. Put them into groups of 5 cats each. How many groups do you have?




10 cats	2 groups
	<div style="border: 1px solid black; padding: 2px; display: inline-block;">  </div> <div style="border: 1px solid black; padding: 2px; display: inline-block;">  </div>
$10 \div 5 = 2$	

How many groups?

		Total number of cats		How many in each group		Number of groups
		↓		↓		↓
		5	÷	5	=	—
 		10	÷	5	=	—
  		15	÷	5	=	—
   		20	÷	5	=	—
    		25	÷	5	=	—
     		30	÷	5	=	—







Divide by 5

You have 10 cats. Put them into groups of 5 cats each. How many groups do you have?

<p>10 cats</p>  <p>10</p>	<p>2 groups</p> <div style="border: 1px solid black; padding: 2px; width: fit-content; margin: 2px auto;">  </div> <div style="border: 1px solid black; padding: 2px; width: fit-content; margin: 2px auto;">  </div> <p>5 = 2</p>
--	--




Total number of cats		How many in each group		Number of groups
↓		↓		↓

How many cats in each group?

	5	÷	—	=	1
	10	÷	—	=	2
	15	÷	—	=	3
	20	÷	—	=	4
	25	÷	—	=	5
	30	÷	—	=	6














Divide by 5

You have 10 cats. Put them into groups of 5 cats each. How many groups do you have?

<p>10 cats</p>  <p>10</p>	<p>2 groups</p> <div style="border: 1px solid black; padding: 2px; width: fit-content; margin: 2px auto;">  </div> <div style="border: 1px solid black; padding: 2px; width: fit-content; margin: 2px auto;">  </div> <p>5 = 2</p>
--	--

Total number of cats		How many in each group		Number of groups
↓		↓		↓

How many number of cats?

	<p>—</p>	<p>÷</p>	<p>5</p>	<p>=</p>	<p>1</p>
 	<p>—</p>	<p>÷</p>	<p>5</p>	<p>=</p>	<p>2</p>
 	<p>—</p>	<p>÷</p>	<p>5</p>	<p>=</p>	<p>3</p>
 	<p>—</p>	<p>÷</p>	<p>5</p>	<p>=</p>	<p>4</p>
 	<p>—</p>	<p>÷</p>	<p>5</p>	<p>=</p>	<p>5</p>
   	<p>—</p>	<p>÷</p>	<p>5</p>	<p>=</p>	<p>6</p>

Name: _____

Date: ____ / ____ / 2022 Start: _____ End: _____

$5 \div 5 = \underline{\quad}$

$20 \div 5 = \underline{\quad}$

$10 \div 5 = \underline{\quad}$

$25 \div 5 = \underline{\quad}$

$15 \div 5 = \underline{\quad}$

$5 \div 5 = \underline{\quad}$

$20 \div 5 = \underline{\quad}$

$10 \div 5 = \underline{\quad}$

$25 \div 5 = \underline{\quad}$

$15 \div 5 = \underline{\quad}$

$5 \div 5 = \underline{\quad}$

$20 \div 5 = \underline{\quad}$

$10 \div 5 = \underline{\quad}$

$25 \div 5 = \underline{\quad}$

$15 \div 5 = \underline{\quad}$

$5 \div 5 = \underline{\quad}$

$20 \div 5 = \underline{\quad}$

$10 \div 5 = \underline{\quad}$

$25 \div 5 = \underline{\quad}$

$15 \div 5 = \underline{\quad}$

$5 \div 5 = \underline{\quad}$

$20 \div 5 = \underline{\quad}$

$10 \div 5 = \underline{\quad}$

$25 \div 5 = \underline{\quad}$

$15 \div 5 = \underline{\quad}$

$5 \div 5 = \underline{\quad}$

Name: _____

Date: ____ / ____ / 2022 Start: _____ End: _____

$5 \div 5 = \underline{\quad}$

$15 \div 5 = \underline{\quad}$

$15 \div 5 = \underline{\quad}$

$25 \div 5 = \underline{\quad}$

$10 \div 5 = \underline{\quad}$

$5 \div 5 = \underline{\quad}$

$20 \div 5 = \underline{\quad}$

$10 \div 5 = \underline{\quad}$

$25 \div 5 = \underline{\quad}$

$20 \div 5 = \underline{\quad}$

$10 \div 5 = \underline{\quad}$

$15 \div 5 = \underline{\quad}$

$5 \div 5 = \underline{\quad}$

$25 \div 5 = \underline{\quad}$

$15 \div 5 = \underline{\quad}$

$5 \div 5 = \underline{\quad}$

$20 \div 5 = \underline{\quad}$

$10 \div 5 = \underline{\quad}$

$25 \div 5 = \underline{\quad}$

$15 \div 5 = \underline{\quad}$

$5 \div 5 = \underline{\quad}$

$25 \div 5 = \underline{\quad}$

$10 \div 5 = \underline{\quad}$

$20 \div 5 = \underline{\quad}$

$20 \div 5 = \underline{\quad}$

$5 \div 5 = \underline{\quad}$

Name: _____

Date: ____ / ____ / 2022 Start: _____ End: _____

$15 \div 5 = \underline{\quad}$

$20 \div 5 = \underline{\quad}$

$5 \div 5 = \underline{\quad}$

$15 \div 5 = \underline{\quad}$

$20 \div 5 = \underline{\quad}$

$15 \div 5 = \underline{\quad}$

$10 \div 5 = \underline{\quad}$

$10 \div 5 = \underline{\quad}$

$25 \div 5 = \underline{\quad}$

$20 \div 5 = \underline{\quad}$

$25 \div 5 = \underline{\quad}$

$25 \div 5 = \underline{\quad}$

$10 \div 5 = \underline{\quad}$

$5 \div 5 = \underline{\quad}$

$5 \div 5 = \underline{\quad}$

$5 \div 5 = \underline{\quad}$

$20 \div 5 = \underline{\quad}$

$25 \div 5 = \underline{\quad}$

$15 \div 5 = \underline{\quad}$

$15 \div 5 = \underline{\quad}$

$25 \div 5 = \underline{\quad}$

$20 \div 5 = \underline{\quad}$

$10 \div 5 = \underline{\quad}$

$10 \div 5 = \underline{\quad}$

$5 \div 5 = \underline{\quad}$

$5 \div 5 = \underline{\quad}$

Name: _____

Date: ____ / ____ / 2022 Start: _____ End: _____

$25 \div 5 = \underline{\quad}$

$25 \div 5 = \underline{\quad}$

$20 \div 5 = \underline{\quad}$

$5 \div 5 = \underline{\quad}$

$15 \div 5 = \underline{\quad}$

$10 \div 5 = \underline{\quad}$

$10 \div 5 = \underline{\quad}$

$25 \div 5 = \underline{\quad}$

$15 \div 5 = \underline{\quad}$

$15 \div 5 = \underline{\quad}$

$5 \div 5 = \underline{\quad}$

$20 \div 5 = \underline{\quad}$

$10 \div 5 = \underline{\quad}$

$15 \div 5 = \underline{\quad}$

$20 \div 5 = \underline{\quad}$

$25 \div 5 = \underline{\quad}$

$25 \div 5 = \underline{\quad}$

$5 \div 5 = \underline{\quad}$

$10 \div 5 = \underline{\quad}$

$20 \div 5 = \underline{\quad}$

$5 \div 5 = \underline{\quad}$

$10 \div 5 = \underline{\quad}$

$15 \div 5 = \underline{\quad}$

$20 \div 5 = \underline{\quad}$

$20 \div 5 = \underline{\quad}$

$5 \div 5 = \underline{\quad}$

Name: _____

Date: ____ / ____ / 2022 Start: _____ End: _____

$15 \div 5 = \underline{\hspace{2cm}}$

$0 \times 5 = \underline{\hspace{2cm}}$

$1 \times 5 = \underline{\hspace{2cm}}$

$25 \div 5 = \underline{\hspace{2cm}}$

$0 \times 5 = \underline{\hspace{2cm}}$

$15 \div 5 = \underline{\hspace{2cm}}$

$0 \times 5 = \underline{\hspace{2cm}}$

$0 \times 5 = \underline{\hspace{2cm}}$

$5 \div 5 = \underline{\hspace{2cm}}$

$10 \div 5 = \underline{\hspace{2cm}}$

$0 \times 5 = \underline{\hspace{2cm}}$

$1 \times 5 = \underline{\hspace{2cm}}$

$0 \times 5 = \underline{\hspace{2cm}}$

$5 \div 5 = \underline{\hspace{2cm}}$

$10 \div 5 = \underline{\hspace{2cm}}$

$15 \div 5 = \underline{\hspace{2cm}}$

$25 \div 5 = \underline{\hspace{2cm}}$

$0 \times 5 = \underline{\hspace{2cm}}$

$20 \div 5 = \underline{\hspace{2cm}}$

$5 \div 5 = \underline{\hspace{2cm}}$

$20 \div 5 = \underline{\hspace{2cm}}$

$20 \div 5 = \underline{\hspace{2cm}}$

$0 \times 5 = \underline{\hspace{2cm}}$

$10 \div 5 = \underline{\hspace{2cm}}$

$0 \times 5 = \underline{\hspace{2cm}}$

$0 \times 5 = \underline{\hspace{2cm}}$

Name: _____

Date: ____ / ____ / 2022 Start: _____ End: _____

$25 \div 5 = \underline{\hspace{2cm}}$

$0 \times 5 = \underline{\hspace{2cm}}$

$0 \times 5 = \underline{\hspace{2cm}}$

$10 \div 5 = \underline{\hspace{2cm}}$

$0 \times 5 = \underline{\hspace{2cm}}$

$0 \times 5 = \underline{\hspace{2cm}}$

$1 \times 5 = \underline{\hspace{2cm}}$

$15 \div 5 = \underline{\hspace{2cm}}$

$5 \div 5 = \underline{\hspace{2cm}}$

$5 \div 5 = \underline{\hspace{2cm}}$

$15 \div 5 = \underline{\hspace{2cm}}$

$25 \div 5 = \underline{\hspace{2cm}}$

$10 \div 5 = \underline{\hspace{2cm}}$

$1 \times 5 = \underline{\hspace{2cm}}$

$0 \times 5 = \underline{\hspace{2cm}}$

$0 \times 5 = \underline{\hspace{2cm}}$

$0 \times 5 = \underline{\hspace{2cm}}$

$0 \times 5 = \underline{\hspace{2cm}}$

$0 \times 5 = \underline{\hspace{2cm}}$

$20 \div 5 = \underline{\hspace{2cm}}$

$1 \times 5 = \underline{\hspace{2cm}}$

$0 \times 5 = \underline{\hspace{2cm}}$

$25 \div 5 = \underline{\hspace{2cm}}$

$10 \div 5 = \underline{\hspace{2cm}}$

$20 \div 5 = \underline{\hspace{2cm}}$

$25 \div 5 = \underline{\hspace{2cm}}$

Name: _____

Date: ____ / ____ / 2022 Start: _____ End: _____

$2 \div 1 = \underline{\hspace{2cm}}$

$20 \div 4 = \underline{\hspace{2cm}}$

$3 \div 3 = \underline{\hspace{2cm}}$

$20 \div 5 = \underline{\hspace{2cm}}$

$4 \div 2 = \underline{\hspace{2cm}}$

$25 \div 5 = \underline{\hspace{2cm}}$

$10 \div 5 = \underline{\hspace{2cm}}$

$10 \div 2 = \underline{\hspace{2cm}}$

$8 \div 4 = \underline{\hspace{2cm}}$

$4 \div 4 = \underline{\hspace{2cm}}$

$12 \div 3 = \underline{\hspace{2cm}}$

$3 \div 1 = \underline{\hspace{2cm}}$

$2 \div 2 = \underline{\hspace{2cm}}$

$1 \div 1 = \underline{\hspace{2cm}}$

$8 \div 2 = \underline{\hspace{2cm}}$

$5 \div 5 = \underline{\hspace{2cm}}$

$6 \div 3 = \underline{\hspace{2cm}}$

$12 \div 4 = \underline{\hspace{2cm}}$

$4 \div 1 = \underline{\hspace{2cm}}$

$5 \div 1 = \underline{\hspace{2cm}}$

$16 \div 4 = \underline{\hspace{2cm}}$

$9 \div 3 = \underline{\hspace{2cm}}$

$15 \div 5 = \underline{\hspace{2cm}}$

$15 \div 3 = \underline{\hspace{2cm}}$

$6 \div 2 = \underline{\hspace{2cm}}$

$10 \div 5 = \underline{\hspace{2cm}}$

Name: _____

Date: ____ / ____ / 2022 Start: _____ End: _____

$15 \div 3 = \underline{\quad}$

$8 \div 2 = \underline{\quad}$

$9 \div 3 = \underline{\quad}$

$25 \div 5 = \underline{\quad}$

$12 \div 4 = \underline{\quad}$

$6 \div 3 = \underline{\quad}$

$16 \div 4 = \underline{\quad}$

$3 \div 3 = \underline{\quad}$

$4 \div 4 = \underline{\quad}$

$6 \div 2 = \underline{\quad}$

$20 \div 4 = \underline{\quad}$

$4 \div 1 = \underline{\quad}$

$5 \div 1 = \underline{\quad}$

$2 \div 2 = \underline{\quad}$

$15 \div 5 = \underline{\quad}$

$4 \div 2 = \underline{\quad}$

$3 \div 1 = \underline{\quad}$

$8 \div 4 = \underline{\quad}$

$20 \div 5 = \underline{\quad}$

$10 \div 2 = \underline{\quad}$

$12 \div 3 = \underline{\quad}$

$2 \div 1 = \underline{\quad}$

$5 \div 5 = \underline{\quad}$

$6 \div 3 = \underline{\quad}$

$1 \div 1 = \underline{\quad}$

$2 \div 1 = \underline{\quad}$

Name: _____

Date: ____ / ____ / 2022 Start: _____ End: _____

$5 \div 5 = \underline{\quad}$

$1 \times 5 = \underline{\quad}$

$12 \div 3 = \underline{\quad}$

$4 \div 2 = \underline{\quad}$

$4 \div 1 = \underline{\quad}$

$2 \times 1 = \underline{\quad}$

$5 \times 1 = \underline{\quad}$

$4 \times 1 = \underline{\quad}$

$4 \times 2 = \underline{\quad}$

$4 \times 2 = \underline{\quad}$

$2 \times 4 = \underline{\quad}$

$5 \times 4 = \underline{\quad}$

$4 \times 5 = \underline{\quad}$

$8 \div 2 = \underline{\quad}$

$4 \div 4 = \underline{\quad}$

$2 \times 4 = \underline{\quad}$

$20 \div 5 = \underline{\quad}$

$5 \div 1 = \underline{\quad}$

$5 \div 5 = \underline{\quad}$

$4 \times 5 = \underline{\quad}$

$1 \times 2 = \underline{\quad}$

$20 \div 4 = \underline{\quad}$

$5 \times 4 = \underline{\quad}$

$20 \div 5 = \underline{\quad}$

$20 \div 4 = \underline{\quad}$

$2 \div 1 = \underline{\quad}$

Name: _____

Date: ____ / ____ / 2022 Start: _____ End: _____

$1 \times 1 = \underline{\quad}$

$1 \times 3 = \underline{\quad}$

$2 \div 2 = \underline{\quad}$

$10 \div 2 = \underline{\quad}$

$2 \times 2 = \underline{\quad}$

$1 \times 4 = \underline{\quad}$

$8 \div 4 = \underline{\quad}$

$3 \div 1 = \underline{\quad}$

$5 \times 3 = \underline{\quad}$

$8 \div 2 = \underline{\quad}$

$8 \div 4 = \underline{\quad}$

$3 \times 5 = \underline{\quad}$

$3 \div 3 = \underline{\quad}$

$15 \div 3 = \underline{\quad}$

$1 \times 5 = \underline{\quad}$

$4 \times 3 = \underline{\quad}$

$3 \times 1 = \underline{\quad}$

$5 \times 1 = \underline{\quad}$

$15 \div 5 = \underline{\quad}$

$1 \div 1 = \underline{\quad}$

$2 \times 5 = \underline{\quad}$

$10 \div 5 = \underline{\quad}$

$5 \times 2 = \underline{\quad}$

$3 \times 4 = \underline{\quad}$

$12 \div 4 = \underline{\quad}$

$5 \div 1 = \underline{\quad}$